

1. A Three-body Problem and LISA

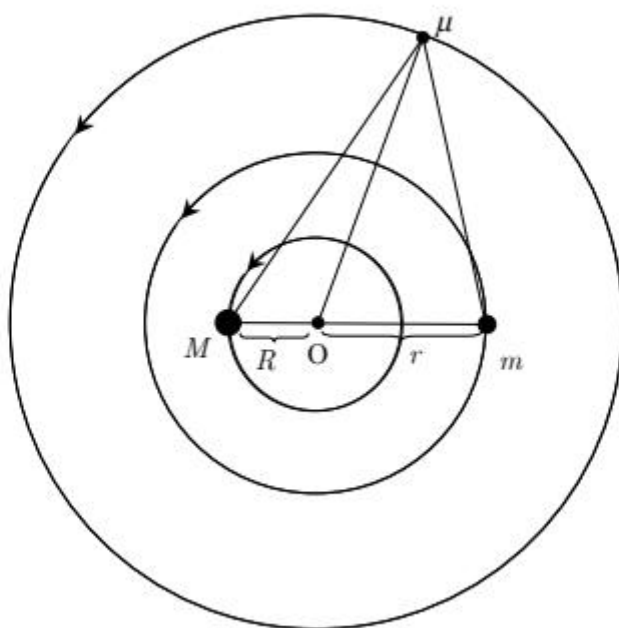


FIGURE 1 Coplanar orbits of three bodies.

- 1.1** Two gravitating masses M and m are moving in circular orbits of radii R and r , respectively, about their common centre of mass. Find the angular velocity ω_0 of the line joining M and m in terms of R, r, M, m and the universal gravitational constant G .

[1.5 points]

- 1.2** A third body of infinitesimal mass μ is placed in a coplanar circular orbit about the same centre of mass so that μ remains stationary relative to both M and m as shown in Figure 1. Assume that the infinitesimal mass is not collinear with M and m . Find the values of the following parameters in terms of R and r :

[3.5 points]

- 1.2.1 distance from μ to M .
- 1.2.2 distance from μ to m .
- 1.2.3 distance from μ to the centre of mass.

- 1.3** Consider the case $M = m$. If μ is now given a small radial perturbation (along $O\mu$), what is the angular frequency of oscillation of μ about the unperturbed position in terms of ω_0 ? Assume that the angular momentum of μ is conserved.

[3.2 points]



The Laser Interferometry Space Antenna (LISA) is a group of three identical spacecrafts for detecting low frequency gravitational waves. Each of the spacecrafts is placed at the corners of an equilateral triangle as shown in Figure 2 and Figure 3. The sides (or 'arms') are about 5.0 million kilometres long. The LISA constellation is in an earth-like orbit around the Sun trailing the Earth by 20° . Each of them moves on a slightly inclined individual orbit around the Sun. Effectively, the three spacecrafts appear to roll about their common centre one revolution per year.

They are continuously transmitting and receiving laser signals between each other. Overall, they detect the gravitational waves by measuring tiny changes in the arm lengths using interferometric means. A collision of massive objects, such as blackholes, in nearby galaxies is an example of the sources of gravitational waves.

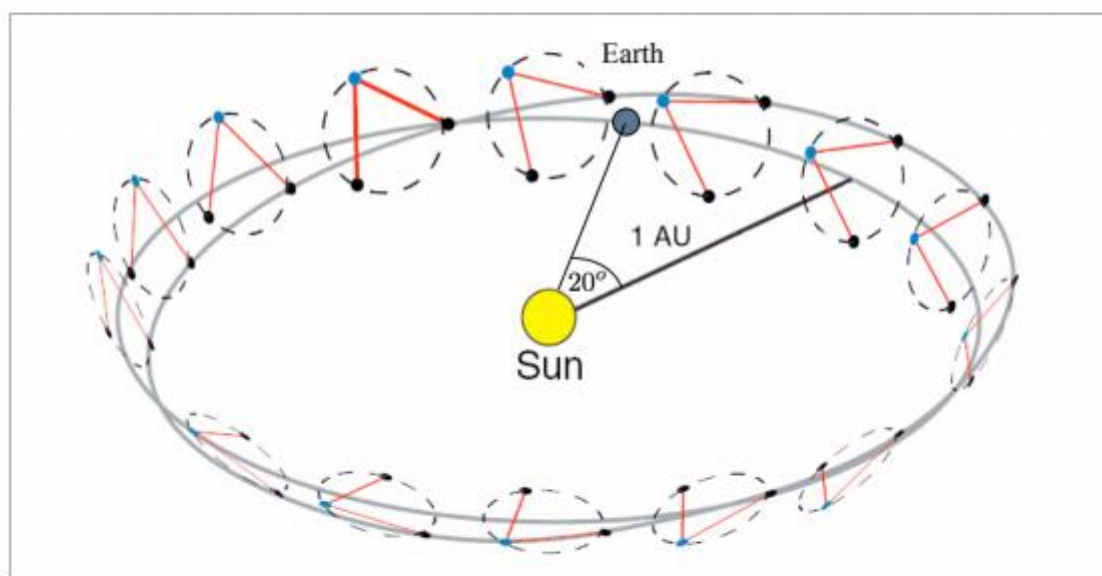


FIGURE 2 Illustration of the LISA orbit. The three spacecraft roll about their centre of mass with a period of 1 year. Initially, they trail the Earth by 20° . (Picture from D.A. Shaddock, "An Overview of the Laser Interferometer Space Antenna", *Publications of the Astronomical Society of Australia*, 2009, **26**, pp.128-132.).

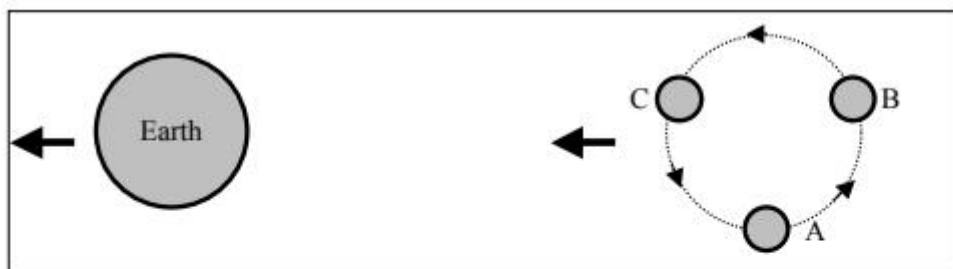


FIGURE 3 Enlarged view of the three spacecraft trailing the Earth. A, B and C are the three spacecraft at the corners of the equilateral triangle.

1.4 In the plane containing the three spacecraft, what is the relative speed of one spacecraft with respect to another? [1.8 point]

关于我们

自主选拔在线是致力于提供新高考生涯规划、强基计划、综合评价、三位一体、学科竞赛等政策资讯的升学服务平台。总部坐落于北京，旗下拥有网站（网址：www.zizzs.com）和微信公众平台等媒体矩阵，用户群体涵盖全国90%以上的重点中学师生及家长，在全国新高考、自主选拔领域首屈一指。

如需第一时间获取相关资讯及备考指南，请关注**自主选拔在线**官方微信号：**zizzsw**。



微信搜一搜

自主选拔在线