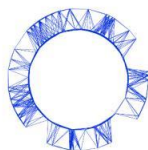


Theory



IPhO 2018
Lisbon, Portugal

Q1-1

English (Official)

LIGO-GW150914 (10 points)

In 2015, the gravitational-wave observatory LIGO detected, for the first time, the passing of gravitational waves (GW) through Earth. This event, named GW150914, was triggered by waves produced by two black holes that were orbiting on quasi-circular orbits. This problem will make you estimate some physical parameters of the system, from the properties of the detected signal.

Part A: Newtonian (conservative) orbits (3.0 points)

- A.1** Consider a system of two stars with masses M_1, M_2 , at locations \vec{r}_1, \vec{r}_2 , respectively, with respect to the center-of-mass of the system, that is, 1.0pt

$$M_1 \vec{r}_1 + M_2 \vec{r}_2 = 0. \quad (1)$$

The stars are isolated from the rest of the Universe and moving at non-relativistic velocities. Using Newton's laws, the acceleration vector of mass M_1 can be expressed as

$$\frac{d^2 \vec{r}_1}{dt^2} = -\alpha \frac{\vec{r}_1}{r_1^n}, \quad (2)$$

where $r_1 = |\vec{r}_1|$, $r_2 = |\vec{r}_2|$. Find $n \in \mathbb{N}$ and $\alpha = \alpha(G, M_1, M_2)$, where G is Newton's constant [$G \simeq 6.67 \times 10^{-11} \text{ N m}^2 \text{ kg}^{-2}$].

- A.2** The total energy of the 2-mass system, in circular orbits, can be expressed as: 1.0pt

$$E = A(\mu, \Omega, L) - G \frac{M\mu}{L}, \quad (3)$$

where

$$\mu \equiv \frac{M_1 M_2}{M_1 + M_2}, \quad M \equiv M_1 + M_2, \quad (4)$$

are the *reduced mass* and *total mass* of the system, Ω is the angular velocity of each mass and L is the total separation $L = r_1 + r_2$. Obtain the explicit form of the term $A(\mu, \Omega, L)$.

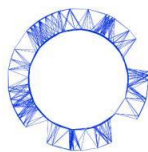
- A.3** Equation 3 can be simplified to $E = \beta G \frac{M\mu}{L}$. Determine the number β . 1.0pt

Part B: Introducing relativistic dissipation (7.0 points)

The correct theory of gravity, *General Relativity*, was formulated by Einstein in 1915, and predicts that gravity travels with the speed of light. The messengers carrying information about the interaction are called GWs. GWs are emitted whenever masses are accelerated, making the system of masses lose energy.

Consider a system of two point-like particles, isolated from the rest of the Universe. Einstein proved that for small enough velocities the emitted GWs: 1) have a frequency which is twice as large as the orbital frequency; 2) can be characterized by a luminosity, i.e. emitted power \mathcal{P} , which is dominated by Einstein's

Theory



IPhO 2018
Lisbon, Portugal

Q1-2

English (Official)

quadrupole formula,

$$\mathcal{P} = \frac{G}{5c^5} \sum_{i=1}^3 \sum_{j=1}^3 \left(\frac{d^3 Q_{ij}}{dt^3} \right) \left(\frac{d^3 Q_{ij}}{dt^3} \right). \quad (5)$$

Here, c is the velocity of light $c \approx 3 \times 10^8$ m/s. For a system of 2 pointlike particles orbiting on the $x-y$ plane, Q_{ij} is the following table (i, j label the row/column number)

$$Q_{11} = \sum_{A=1}^2 \frac{M_A}{3} (2x_A^2 - y_A^2), \quad Q_{22} = \sum_{A=1}^2 \frac{M_A}{3} (2y_A^2 - x_A^2), \quad Q_{33} = -\sum_{A=1}^2 \frac{M_A}{3} (x_A^2 + y_A^2), \quad (6)$$

$$Q_{12} = Q_{21} = \sum_{A=1}^2 M_A x_A y_A, \quad (7)$$

and $Q_{ij} = 0$ for all other possibilities. Here, (x_A, y_A) is the position of mass A in the center-of-mass frame.

- B.1** For the circular orbits described in A.2 the components of Q_{ij} can be expressed as a function of time t as: 1.0pt

$$Q_{ii} = \frac{\mu L^2}{2} (a_i + b_i \cos kt), \quad Q_{ij}^{i \neq j} = \frac{\mu L^2}{2} c_{ij} \sin kt. \quad (8)$$

Determine k in terms of Ω and the numerical values of the constants a_i, b_i, c_{ij} .

- B.2** Compute the power \mathcal{P} emitted in gravitational waves for that system, and obtain: 1.0pt

$$\mathcal{P} = \xi \frac{G}{c^5} \mu^2 L^4 \Omega^6. \quad (9)$$

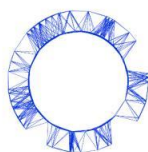
What is the number ξ ? [If you could not obtain ξ , use $\xi = 6.4$ in the following.]

- B.3** In the absence of GW emission the two masses will orbit on a fixed circular orbit indefinitely. However, the emission of GWs causes the system to lose energy and to slowly evolve towards smaller circular orbits. Obtain that the rate of change $\frac{d\Omega}{dt}$ of the orbital angular velocity takes the form 1.0pt

$$\left(\frac{d\Omega}{dt} \right)^3 = (3\xi)^3 \frac{\Omega^{11}}{c^{15}} (GM_c)^5, \quad (10)$$

where M_c is called the *chirp mass*. Obtain M_c as a function of M and μ . This mass determines the increase in frequency during the orbital decay. [The name "chirp" is inspired by the high pitch sound (increasing frequency) produced by small birds.]

Theory



IPhO 2018
Lisbon, Portugal

Q1-3

English (Official)

- B.4** Using the information provided above, relate the orbital angular velocity Ω with the GW frequency f_{GW} . Knowing that, for any smooth function $F(t)$ and $a \neq 1$, 2.0pt

$$\frac{dF(t)}{dt} = \chi F(t)^a \Rightarrow F(t)^{1-a} = \chi(1-a)(t-t_0), \quad (11)$$

where χ is a constant and t_0 is an integration constant, show that (10) implies that the GW frequency is

$$f_{\text{GW}}^{1+8/3} = 8\pi^{8/3} \xi \left(\frac{GM_c}{c^3} \right)^{(2/3)+p} (t_0 - t)^{2-p} \quad (12)$$

and determine the constant p .

On September 14, 2015 GW150914 was registered by the LIGO detectors, consisting of two L-shaped arms, each 4 km long. These arms changed by a relative length according to Fig. 1. The arms of the detector respond linearly to a passing gravitational wave, and the response pattern mimics the wave. This wave was created by two black holes on quasi-circular orbits; the loss of energy through gravitational radiation caused the orbit to shrink and the black holes to eventually collide. The collision point corresponds, roughly, to the peak of the signal after point D, in Fig. 1.

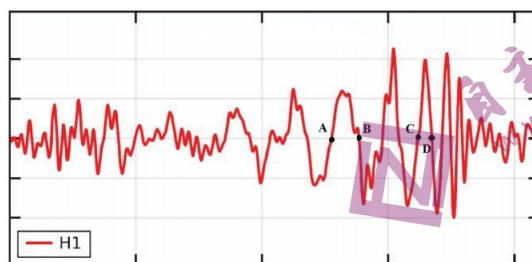


Figure 1. Strain, i.e. relative variation of the size of each arm, at the LIGO detector H1. The horizontal axis is time, and the points A, B, C, D correspond to $t = 0.000, 0.009, 0.034, 0.040$ seconds, respectively.

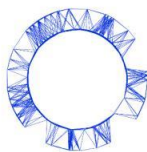
- B.5** From the figure, estimate $f_{\text{GW}}(t)$ at 1.0pt

$$t_{\overline{AB}} = \frac{t_B + t_A}{2} \quad \text{and} \quad t_{\overline{CD}} = \frac{t_D + t_C}{2}. \quad (13)$$

Assuming that (12) is valid all the way until the collision (which strictly speaking is not true) and that the two objects have equal mass, estimate the chirp mass, M_c , and total mass of the system, in terms of solar masses $M_\odot \simeq 2 \times 10^{30}$ kg.

- B.6** Estimate the minimal orbital separation between the two objects at $t_{\overline{CD}}$. Hence estimate a maximum size for each object, R_{max} . Obtain R_\odot/R_{max} to compare this size with the radius of our Sun, $R_\odot \simeq 7 \times 10^5$ km. Estimate also their orbital linear velocity at the same instant, v_{col} , comparing it with the speed of light, v_{col}/c . 1.0pt

Theory



IPhO 2018
Lisbon, Portugal

Q1-4

English (Official)

Conclude that these are extremely fast moving, extremely compact objects indeed!

关于我们

自主选拔在线是致力于提供新高考生涯规划、强基计划、综合评价、三位一体、学科竞赛等政策资讯的升学服务平台。总部坐落于北京，旗下拥有网站（网址：www.zizzs.com）和微信公众平台等媒体矩阵，用户群体涵盖全国90%以上的重点中学师生及家长，在全国新高考、自主选拔领域首屈一指。

如需第一时间获取相关资讯及备考指南，请关注**自主选拔在线**官方微信信号：**zizzsw**。

